




1 Écris les 2 multiplications correspondant à chaque dessin.




$$2 \times 4 \text{ ou } 4 \times 2$$



$$\underline{\quad} \text{ ou } \underline{\quad}$$

$$\underline{\quad} \text{ ou } \underline{\quad}$$




2 Écris chaque multiplication sous forme d'une addition et calcule.

$$4 \times 100 = \underline{\hspace{2cm}} = \underline{\hspace{2cm}}$$

$$8 \times 5 = \underline{\hspace{2cm}} = \underline{\hspace{2cm}}$$

$$3 \times 20 = \underline{\hspace{2cm}} = \underline{\hspace{2cm}}$$



3 Écris chaque addition sous forme d'une multiplication et calcule.

$$50 + 50 + 50 + 50 + 50 + 50 = \underline{\quad} \times \underline{\quad} = \underline{\quad}$$

$$2 + 2 + 2 + 2 + 2 + 2 + 2 + 2 + 2 + 2 = \underline{\quad} \times \underline{\quad} = \underline{\quad}$$

$$10 + 10 + 10 + 10 = \underline{\quad} \times \underline{\quad} = \underline{\quad}$$

