


1 Combien y a-t-il de billes ?

Il y a 3 bocaux de 4 billes.



$$4 + 4 + 4 = 12$$


$$3 \times 4 = 12$$



$$\underline{\quad} + \underline{\quad} + \underline{\quad} + \underline{\quad} = \underline{\quad}$$

$$\underline{\quad} \times \underline{\quad} = \underline{\quad}$$

2 Combien y a-t-il d'étoiles de mer ?




$$\underline{\quad} + \underline{\quad} + \underline{\quad} + \underline{\quad} = \underline{\quad}$$

$$\underline{\quad} \times \underline{\quad} = \underline{\quad}$$

3 Combien y a-t-il de fleurs ?

$$\underline{\quad} + \underline{\quad} + \underline{\quad} + \underline{\quad} + \underline{\quad} = \underline{\quad}$$

$$\underline{\quad} \times \underline{\quad} = \underline{\quad}$$



4 Transforme ces additions en multiplications.

$$\text{10} + \text{10} + \text{10} = \underline{\quad} \times \underline{\quad}$$

$$\text{5} + \text{5} + \text{5} = \underline{\quad} \times \underline{\quad}$$